

1. Work out $146 + 84$
(1 mark)2. Work out $136 - 78$
(1 mark)3. Work out 24×32
(1 mark)4. Work out $261 \div 3$
(1 mark)

5. Round 15474 to the nearest 10

.....
(1 mark)6. Work out $-8 + 19$
(1 mark)7. What is $\frac{3}{5}$ of 20.....
(1 mark)

8. Find 30% of 70

.....
(1 mark)9. Convert $\frac{3}{4}$ to a decimal.....
(1 mark)10. Calculate $9^2 - \sqrt{4}$
(2 marks)

11. Fill in the missing numbers

 $3, 7, 11, \dots, 19, \dots,$

(1 mark)

12. Simplify

 $\frac{5}{40}$
(1 mark)

Name : Class..... Score.....

13. Simplify $2a + 4a - 3a + a$

 (1 mark)

14. Simplify $5y \times 6$

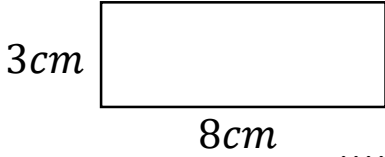
 (1 mark)

15. Expand $2(7a + 1)$

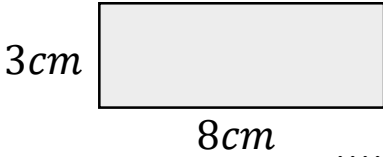
 (2 marks)

16. Write down all the factors of 12

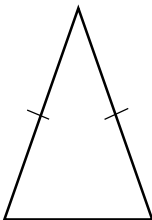
 (1 mark)

17. Calculate the perimeter


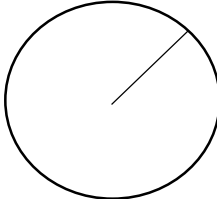
 (1 mark)

18. Calculate the area



 (1 mark)

19. Name this shape


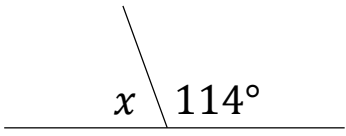
 (1 mark)

20. Name this part of a circle


 (1 mark)

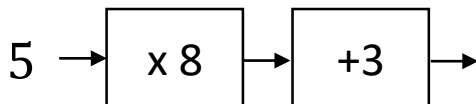
21. Draw all the lines of symmetry


 (1 mark)

22. Calculate x

 $x = \dots\dots\dots$
 (1 mark)

23. Workout
 $2 + 5 \times 8$

 (1 mark)

24. Solve


 (1 mark)